






Topic – Addition




Explanation Note




Resource Person – Gloria Gomes




Name- _____ Class: I Sec: _____ Date- _____

- When we put things together, we add.
- + (plus) sign is used for addition.

i)  and  is 
 $\boxed{2} + \boxed{1} = \boxed{3}$

ii)  and  is 
 $\boxed{2} + \boxed{2} = \boxed{4}$

iii)  and  is 
 $\boxed{} + \boxed{} = \boxed{}$

iv)  and  is 
 $\boxed{} + \boxed{} = \boxed{}$






Topic – Pictorial Addition




Worksheet -1




Resource Person – Gloria Gomes

Name - _____ Class: I Sec: _____ Date- _____

I. Count and add the given objects.

a.  +  = 
 $\boxed{} + \boxed{} = \boxed{}$

b.  +  = 
 $\boxed{} + \boxed{} = \boxed{}$

c.  +  = 
 $\boxed{} + \boxed{} = \boxed{}$